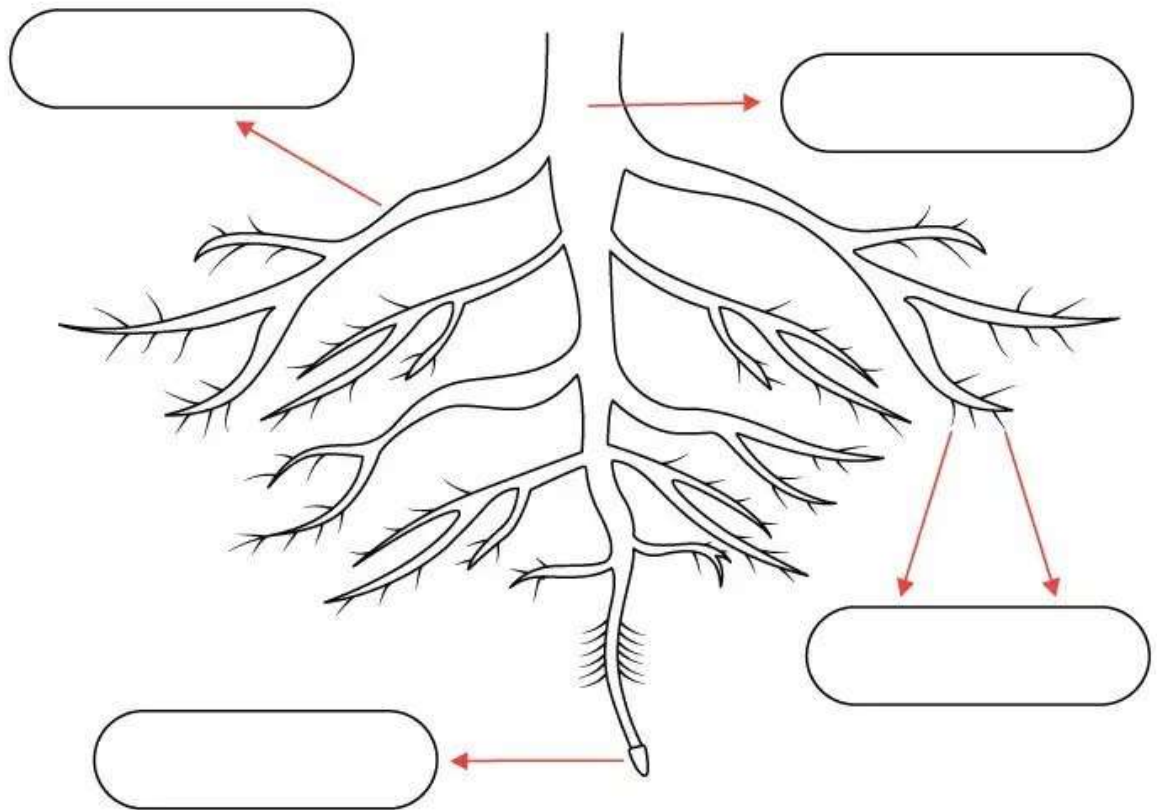


**Topshiriqlar:**

1. Complete the free area`s.

## Parts of a Root Worksheet

1. Identify the different parts of the root and label them accordingly.




2. Fill in the blanks using the wordbox.

The \_\_\_\_\_ is the thickest part of the root that grows downwards into the soil. The \_\_\_\_\_ are thinner and branch sideways. The \_\_\_\_\_ absorb \_\_\_\_\_ and \_\_\_\_\_ from the soil.

root hairs    primary root    water    secondary roots    nutrients

2. Complete sentences.

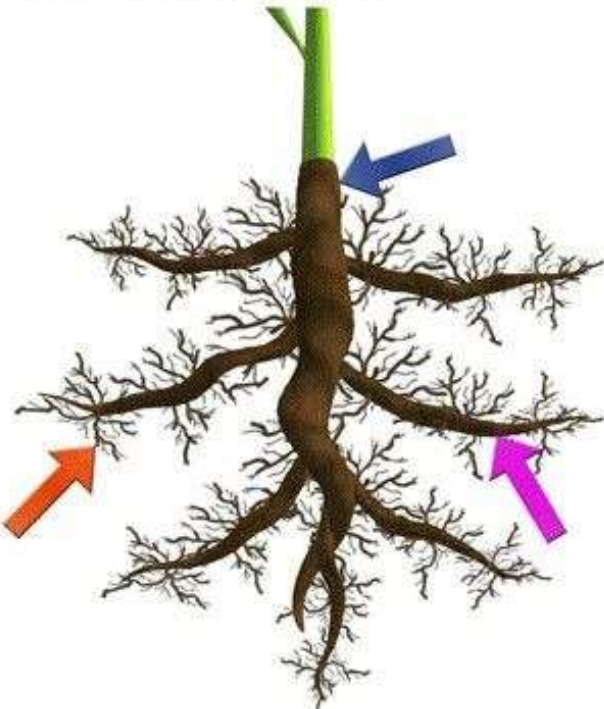


# Root Structure

Use the words on the left to fill in the blanks in the sentences and to label the arrows in the picture below.

**Words to Use**

- primary root
- root hairs
- secondary roots



The \_\_\_\_\_ is the thickest and grows downwards. The \_\_\_\_\_ are not as thick, and tend to grow sideways. The \_\_\_\_\_ absorb water and nutrients from the soil.

Roots support the plant, gather water and nutrients and store food that the plant makes.

© Rock 'N Learn, Inc. from *Life Science*

[www.markothepencil.com](http://www.markothepencil.com)